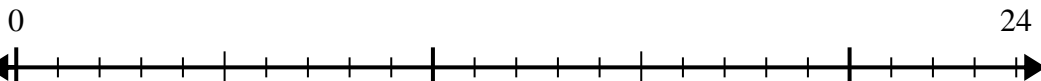




Use the number line to solve the division problem.

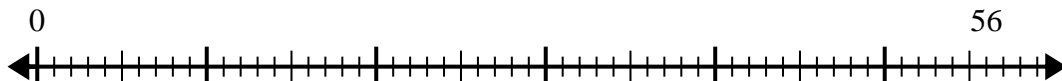
Answers

1) $24 \div 4 =$



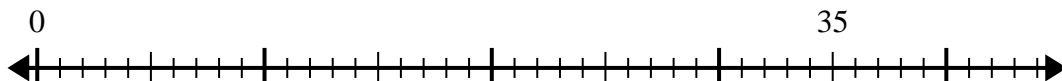
1. _____

2) $56 \div 8 =$



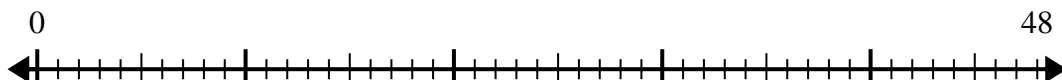
2. _____

3) $35 \div 5 =$



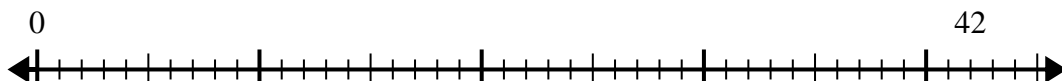
3. _____

4) $48 \div 8 =$



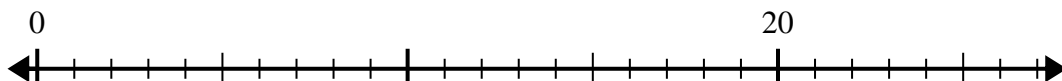
4. _____

5) $42 \div 6 =$



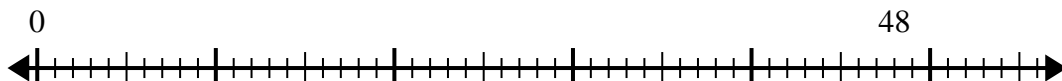
5. _____

6) $20 \div 5 =$



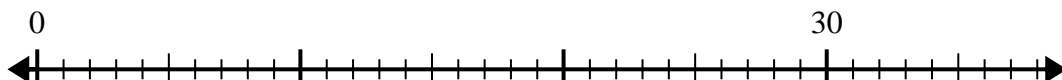
6. _____

7) $48 \div 6 =$



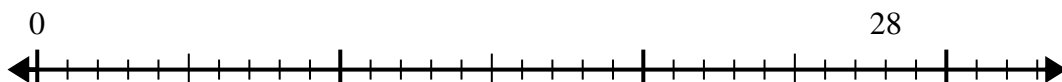
7. _____

8) $30 \div 5 =$



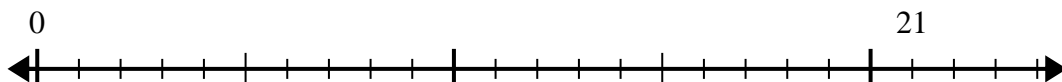
8. _____

9) $28 \div 7 =$



9. _____

10) $21 \div 7 =$

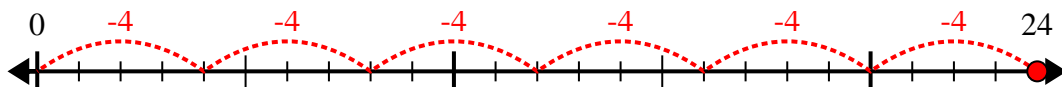


10. _____

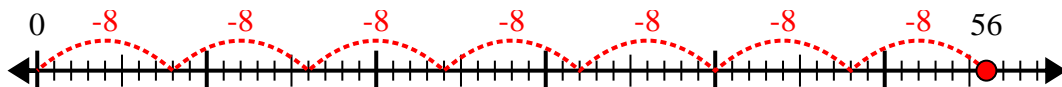


Use the number line to solve the division problem.

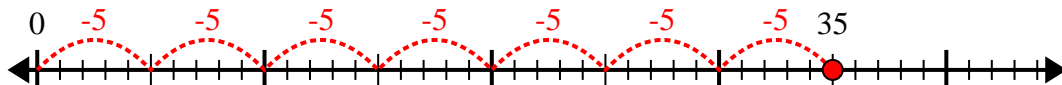
1) $24 \div 4 =$



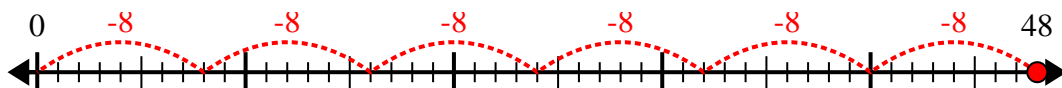
2) $56 \div 8 =$



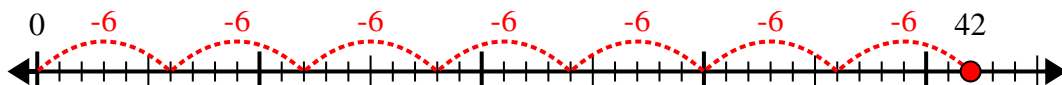
3) $35 \div 5 =$



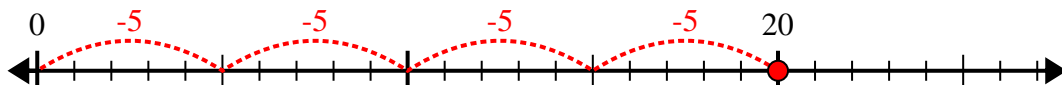
4) $48 \div 8 =$



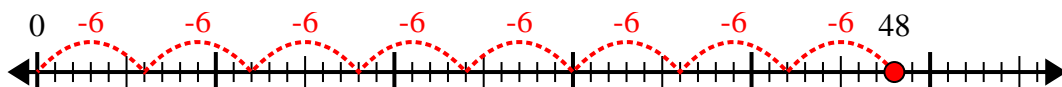
5) $42 \div 6 =$



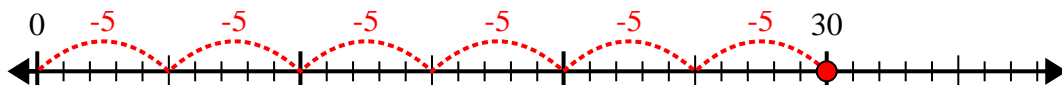
6) $20 \div 5 =$



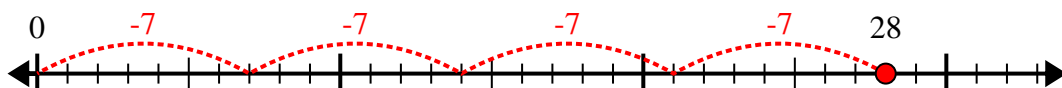
7) $48 \div 6 =$



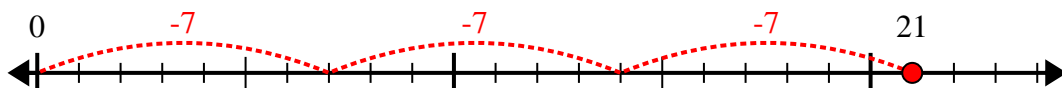
8) $30 \div 5 =$



9) $28 \div 7 =$



10) $21 \div 7 =$



Answers

1. 6

2. 7

3. 7

4. 6

5. 7

6. 4

7. 8

8. 6

9. 4

10. 3